

# Functional Skills

## Mathematics

Entry Level 1

Set 4

External Assessment



Time allowed: 1 hour

Learner Name										
Date Of Birth										
Unique Learner Number (ULN)										
Centre Name										
Today's Date										

**Do not open the paper until you are told to do so.**

**Please read the following carefully before you begin this assessment:**

- All of the details in the box above **MUST** be completed
- Check that your paper is the correct level and the correct subject
- All papers **MUST** be handed in at the end of the assessment
- You **MUST NOT** take assessment papers outside the assessment room
- You will need a blue or black pen, pencil, rubber and ruler
- You may use a calculator
- You should try to answer all questions on this assessment paper
- Allow time to check your answers before the assessment ends
- Work through the paper steadily dividing your time between questions

### Paper Information:

- There are **9** questions to answer
- Maximum marks available are **20**
- You have a total of **1 hour** to complete all questions on the assessment paper

For Marker's Use	
Questions	Mark
1-2 (7)	
3-5 (5)	
6-9 (8)	
Total (20)	

## Task 1

Ellie and Petra are driving in their car. They see this sign:




### Question 1

(2 marks)

Which of the towns is the **closest**?

Ellie and Petra drive past some roadworks.

They **see these signs**:



**Question 2**

**(5 marks)**

a) Petra notices that the signs are **two different shapes**.

Name **each shape** and note **how many of each** there are.

b) How many signs are there?

## Task 2

Ellie stops for petrol. She puts **£20** of petrol into the car.

Ellie needs to pay for the petrol.

### Question 3

(1 mark)

Identify the **correct money** to pay with from Ellie's **three notes**.

Put a tick next to the **correct note**:



While Ellie pays for petrol, Petra buys some water.

Choice of water:



50p



£1



£1.50

**Question 4**

**(1 mark)**

Petra wants the **largest bottle** of water.

**Tick the bottle** that Petra should take.

Petra finds these **two coins** in her pocket.



**Question 5**

**(3 marks)**

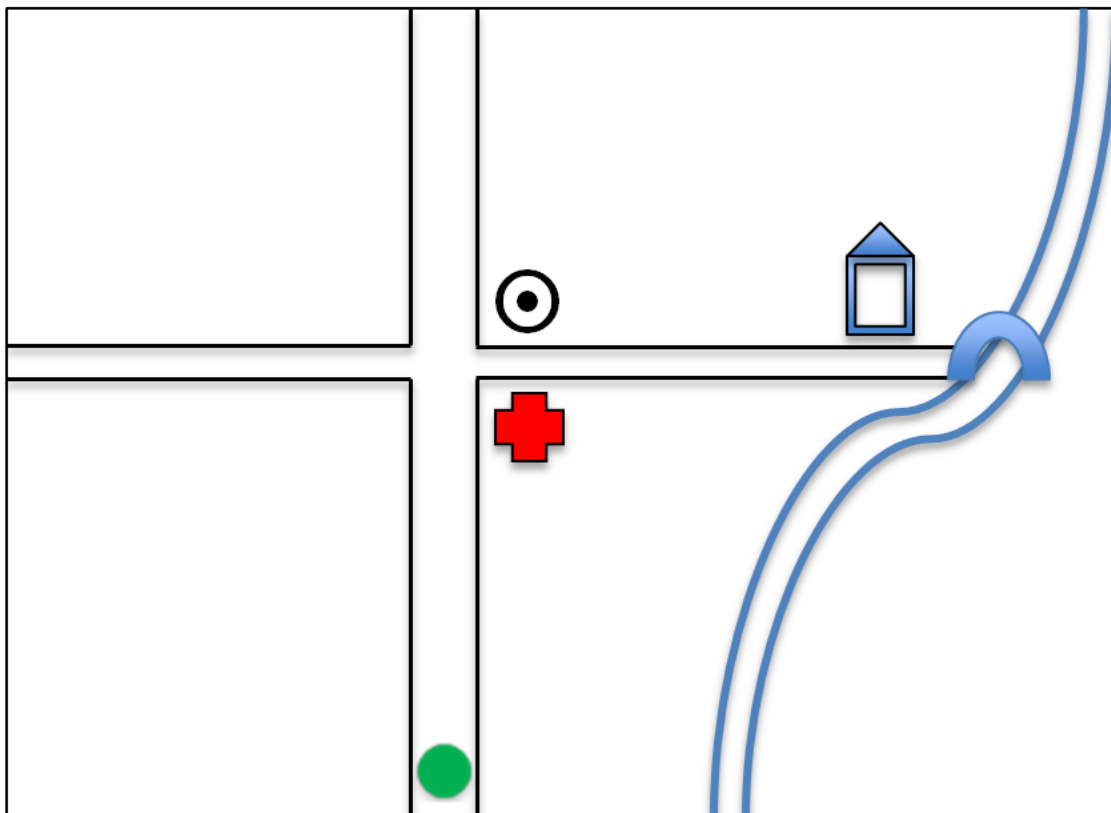
Does Petra have **enough money** for the **large** water?

Show how you know this.

Will she have **any change**?

### Task 3

Ellie and Petra arrive at the local town. They see this map.



	You are here
	Main shopping area
	Riverside Hotel
	Hospital

**Question 6**

**(2 marks)**

Describe **where** the **hospital** is on the map.

**Choose two** from this list (put **a cross** in the correct boxes):

<b>After</b> the bridge	
On the <b>first</b> street corner	
In the <b>centre</b> of the map	
On the <b>edge</b> of the map	
<b>Next</b> to the hotel	

**Question 7**


**(1 mark)**

Petra and Ellie are looking for the **hotel**. Petra says they need to **turn at the hospital**.

**Which direction** must Ellie turn?




Ellie and Petra arrive at the hotel. The car park has this sign:



Cars  
5 feet



Vans and trucks  
7 feet



Caravans  
7 feet

**Question 8**

**(3 marks)**

Which of these **cannot** use the car park?

Petra and Ellie will need **between 4 or 5 hours** in the car park. Here are the charges.

<b>2 hours</b>	<b>£3</b>
<b>6 hours</b>	<b>£4</b>
<b>Full day (12 hours)</b>	<b>£8</b>

**Question 9**

**(2 marks)**

**How much** will they need to pay for parking?

Show how you know this.

**End of assessment**